

MBIADMISSION

TOGETHER  
WE CREATE  
YOUR  
FUTURE

# Soal UMMBI 2016

Madrasah Bertaraf Internasional Amanatul Ummah Pacet

**PETUNJUK UMUM**

1. Mengisi identitas lengkap kedalam lembar jawab komputer ( LJK )
2. Kode pada naskah soal wajib di isi pada lembar jawab komputer ( LJK )
3. Nomor Peserta wajib di isi dengan lengkap sesuai dengan kartu peserta
4. Periksa dan bacalah setiap soal dengan seksama sebelum menjawab
5. Memilih salah satu jawaban (a), (b), ( c ) dan (d) yang paling benar pada setiap nomor soal
6. Laporkan kepada pengawas jika terdapat kerusakan LJK dan kekurangan pada naskah soal
7. Tidak diperkenankan menggunakan HP, Alfalink, kamus Bahasa Inggris dan alat bantu yang lain.

**KEMAMPUAN MATEMATIKA**

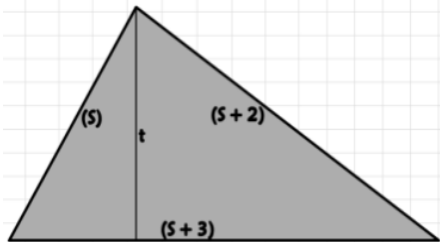
1. Pak Budi memiliki pipa aluminium sepanjang  $1\frac{3}{7}$ , esok harinya ia memotong  $\frac{8}{15}$  bagiannya untuk digunakan mengganti pipa yang rusak. Jika memerlukan pipa sepanjang  $3\frac{2}{3}$  untuk mengganti dibagian lainnya, maka kekurangan pipa yang Pak Budi perlukan adalah ....

- |                  |                   |
|------------------|-------------------|
| A. $\frac{5}{3}$ | C. $\frac{9}{3}$  |
| B. $\frac{8}{3}$ | D. $\frac{12}{3}$ |

2. Nilai dari :  $\frac{1}{1 \times 2} + \frac{1}{2 \times 3} + \frac{1}{3 \times 4} + \dots + \frac{1}{12 \times 13} = \dots$

- |                    |                  |
|--------------------|------------------|
| A. $\frac{12}{13}$ | C. $\frac{7}{8}$ |
| B. $\frac{10}{11}$ | D. $\frac{3}{4}$ |

3. Jika keliling segitiga 20 cm dan tingginya 6 cm, maka luas segitiga tersebut adalah ....



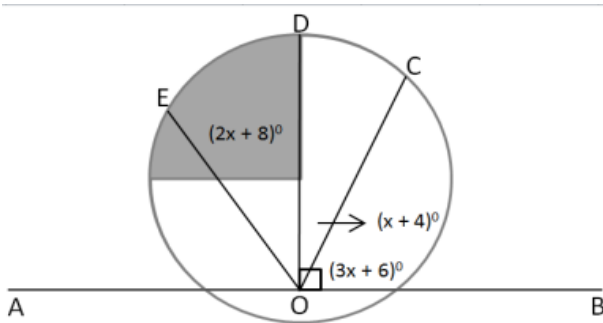
- A.  $16 \text{ cm}^2$
- B.  $24 \text{ cm}^2$
- C.  $40 \text{ cm}^2$
- D.  $48 \text{ cm}^2$

4. Volume kubus dengan panjang diagonal ruang  $8\sqrt{3} \text{ cm}$  adalah ....

- |                       |                       |
|-----------------------|-----------------------|
| A. $216 \text{ cm}^3$ | C. $512 \text{ cm}^3$ |
| B. $343 \text{ cm}^3$ | D. $729 \text{ cm}^3$ |



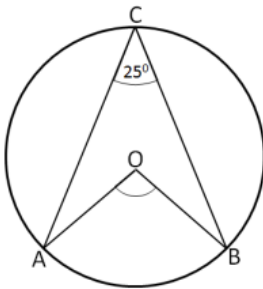
11. Perhatikan gambar berikut.



Besar  $\angle COE$  pada gambar di atas adalah....

- A.  $75^{\circ}$  C.  $65^{\circ}$   
B.  $72^{\circ}$  D.  $62^{\circ}$

12. Perhatikan gambar berikut.



Jika Besar  $\angle ACB = 25^{\circ}$ , besar  $\angle AOB$  adalah....

- A.  $50^{\circ}$  C.  $25^{\circ}$   
B.  $32,5^{\circ}$  D.  $12,5^{\circ}$

13. Pada lingkaran nomor 12, luas juring AOB adalah....

- A.  $\frac{5}{72}\pi r^2$  C.  $\frac{1}{4}\pi r^2$   
B.  $\frac{5}{36}\pi r^2$  D.  $\frac{1}{2}\pi r^2$

14. Diketahui  $g: x \rightarrow x^2 + 2$  dengan domain  $\{x \mid -2 < x \leq 2, x \in \text{bilangan bulat}\}$ , rangenya adalah....

- A.  $\{-2, -1, 0, 1, 2\}$  C.  $\{-1, 0, 1\}$   
B.  $\{2, 3, 6\}$  D.  $\{-2, -2, 0, 1\}$

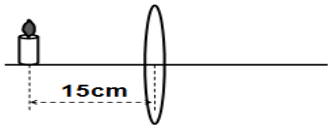


- B. 500 m  
D. 700 m

19. Sebangkah logam dipanaskan dalam waktu tertentu dan suhunya naik  $12^{\circ}\text{C}$ . Jika jumlah kalor yang sama diberikan pada sebangkah logam lain yang bermassa setengahnya dan kalor jenis dua kalinya, maka suhunya akan naik ....

- A.  $3^{\circ}\text{C}$   
B.  $6^{\circ}\text{C}$   
C.  $12^{\circ}\text{C}$   
D.  $24^{\circ}\text{C}$

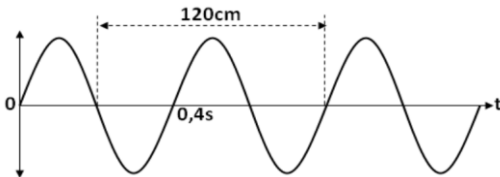
20. Benda terletak didepan lensa cembung seperti pada gambar.



Pada posisi benda seperti gambar, diperoleh bayangan nyata yang diperbesar 2 kali. Jarak fokus lensa tersebut adalah ....

- A. 30 cm  
B. 22,5 cm  
C. 10 cm  
D. 7,5 cm

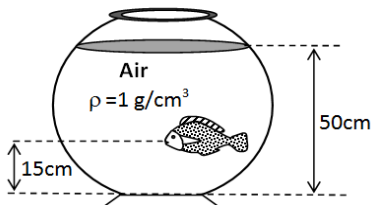
21. Gelombang merambat seperti gambar.



Berdasarkan data pada gambar, cepat rambat gelombang tersebut adalah ....

- A. 300 cm/s  
B. 200 cm/s  
C. 48 cm/s  
D. 32 cm/s

22. Perhatikan gambar berikut!



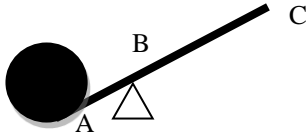
Jika percepatan gravitasi bumi  $10 \text{ m/s}^2$ , tekanan air pada mulut ikan adalah ....

- A.  $150 \text{ N/m}^2$   
C.  $3500 \text{ N/m}^2$

B.  $500 \text{ N/m}^2$

D.  $35000 \text{ N/m}^2$

23. Pada tuas di samping, jarak  $AB = 20 \text{ cm}$ ,  $AC = 1 \text{ m}$ . Keuntungan mekanik tuas pada gambar dibawah, adalah ....



A.  $1/5$

C. 4

B.  $1/4$

D. 5

24. Sebuah trafo memiliki efisiensi 75%. Tegangan inputnya 220 V dan tegangan outputnya 110 V. Jika kuat arus primer yang mengalir 2 A, kuat arus sekundernya adalah ....

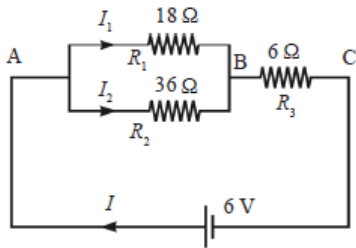
A. 5 A

C. 3 A

B. 4 A

D. 2 A

25. Perhatikan gambar rangkaian listrik tertutup berikut!



Jika hambatan dalam baterai diabaikan, maka beda potensial antara titik A dan titik B ( $V_{AB}$ ) adalah ....

A. 5 volt

C. 3 volt

B. 4 volt

D. 2 volt

26. Berikut ini merupakan senyawa, kecuali ...

A. Emas

C. Garam

B. Gula

D. Glukosa

27. Sebanyak 50 gram gula dilarutkan dalam 450 gram air maka dalam gula dalam larutan tsb sebanyak ....

A. 12,5 %

C. 10 %

B. 15 %

D. 20 %

28. Garam dapur dapat dihasilkan dengan mereaksikan unsur ....

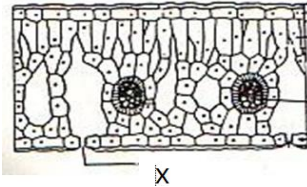
A. Natrium dengan klorin

C. Kalium dengan klorin

B. Natrium dengan bromin

D. Kalsium dengan bromine

29. Sebanyak 100 gram garam dilarutkan dalam air hingga membentuk larutan 20 % (m/m) berapa garam air yang digunakan dalam larutan itu ....
- A. 200  
B. 400  
C. 500  
D. 600
30. Air yang diperoleh dari hasil distilasi air laut disebut ...
- A. Air Payau  
B. Air suling  
C. Air laut  
D. Air sumur
31. Spesies kelompok sporozoa yang dapat menyebabkan keguguran pada kehamilan muda adalah...
- A. Plasmodium  
B. Trypanosome  
C. Toxoplasma  
D. Entamoeba
32. Perhatikan gambar penampang daun di bawah ini!



Bagian yang bertanda X berfungsi untuk...

- A. Tempat terjadinya fotosintesis  
B. Tempat pengangkutan hasil fotosintesis  
C. Tempat keluar masuknya udara  
D. Tempat pengangkutan air dan garam mineral
33. Yang menyebabkan kelelahan otot setelah bekerja keras adalah...
- A. Produksi panas yang berlebihan  
B. Penimbunan asam laktat  
C. Kehilangan air karena berkeringat  
D. Kegagalan rangsangan saraf pada otot
34. Berikut ini adalah ciri-ciri organism yang tergolong ke dalam jenis jamur:
- 1) Memiliki tubuh buah yang bentuknya bermacam-macam
  - 2) Sumber bahan makanan dengan kadar protein tinggi
  - 3) Hifa bersekat
  - 4) Perkembangbiakan secara generative
- Jamur yang memiliki cirri-ciri tersebut termasuk kelompok...
- A. Basidiomycota  
B. Deuteromycota  
C. Ascomycota  
D. Oomycota
35. Pada klasifikasi, tumbuhan bambu dan jagung memiliki persamaan nama kelas dan ciri adalah...
- A. Dikotil, batang beruas-ruas dan bunga bermahkota  
B. Dikotil, batang berkayu dan bunga tak bermahkota  
C. Monokotil, batang berkayu dan bunga tak bermahkota  
D. Monokotil, batang beruas-ruas dan bunga tak bermahkota



36. Disilangkan galur murni kacang kapri bulat warna kuning (BBKK) dengan biji keriput warna hijau (bbkk). Apabila F1 disilangkan sesamanya, akan dihasilkan 320 keturunan. Jumlah keturunan berbiji keriput warna kuning dan keriput warna hijau secara berurutan adalah...
- A. 20 dan 60  
B. 20 dan 120  
C. 20 dan 180  
D. 60 dan 20
37. Di bawah ini kelompok penyakit yang disebabkan oleh virus adalah ....
- A. SARS, disenteri, hepatitis  
B. SARS, AIDS, hepatitis  
C. SARS, , disenteri, typhus  
D. Typus, cacar, hepatitis
38. Kabut asap yang sering terjadi di Pekanbaru, Riau dapat menimbulkan sesak napas. Hal ini terjadi karena ...
- A. Gas CO yang masuk kedalam tubuh lebih sulit diikat oleh hemoglobin daripada oksigen  
B. Kandungan oksigen di dalam darah sangat sedikit sehingga tubuh kekurangan oksigen  
C. Gas karbon dioksida yang terdapat di dalam asap terserap oleh darah dan mengganggu pernapasan  
D. Paru-paru menyempit karena terlalu banyak partikel debu, sehingga sulit menyerap oksigen.
39. Usaha untuk memberantas bakteri patogen pada bahan makanan dengan mempertahankan nilai gizinya ialah dengan...
- A. Sterilisasi  
B. Diasinkan  
C. pasteurisasi  
D. dikeringinkan
40. Organ di bawah ini terdapat pada sistem reproduksi wanita:
- 1) Oviduk  
2) ovarium  
3) uterus  
4) vagina
- Bagian yang berperan sebagai tempat terjadinya fertilisasi dan pertumbuhan embrio adalah ....
- A. 1 dan 2  
B. 1 dan 3  
C. 2 dan 3  
D. 2 dan 4

**PETUNJUK UMUM**

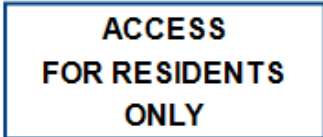
8. Mengisi identitas lengkap kedalam lembar jawab komputer ( LJK )
9. Kode pada naskah soal wajib di isi pada lembar jawab komputer ( LJK )
10. Nomor Peserta wajib di isi dengan lengkap sesuai dengan kartu peserta
11. Periksa dan bacalah setiap soal dengan seksama sebelum menjawab
12. Memilih salah satu jawaban (a), (b), (c) dan (d) yang paling benar pada setiap nomor soal
13. Laporkan kepada pengawas jika terdapat kerusakan LJK dan kekurangan pada naskah soal
14. Tidak diperkenankan menggunakan HP, Alfalink, kamus Bahasa Inggris dan alat bantu yang lain.

**KEMAMPUAN BAHASA INGGRIS**

Choose the best answer for the following questions.

**A. Reading Section**

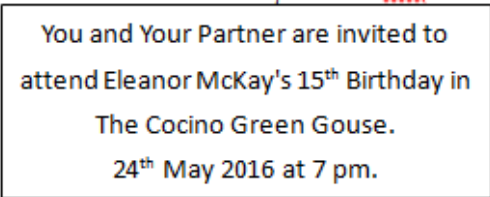
1. You find this notice at the gate of a housing complex.



It means that only the .... at the housing complex can go there.

- |                    |                 |
|--------------------|-----------------|
| A. security guards | C. participants |
| B. people          | D. Guest        |

The invitation below to answer question 2 dan 3.



2. How old will Eleanor McKay be in 2019?
 

A. 18	C. 15
B. 20	D. 23
3. When was Eleanor McKay born?
 

A. In 2003	C. In 2000
B. In 2001	D. In 2011

This text is for question 4 and 5

### Student Writing Contest

THE ATLANTIC MONTHLY invites submissions of poems, fiction, and personal or journalistic essays for this year's Student Writing Contest.

CATEGORIES Poetry, fiction, and personal or journalistic essays

MANUSCRIPTS Should be typewritten (one side only, please) double-spaced, and accompanied by a cover sheet with the following information: title, category, word count, author's name, address, phone number, e-mail address (if available), and academic institution. Of this information, only the title should appear on the manuscripts itself.

POSTMARK SUBMISSIONS BY DECEMBER

AND SEND TO: Students Writing Contest The Atlantic Monthly 77 N. Washington Steer Boston, MA 02114

Source: [www.theatlantic.com/about/contest/htm](http://www.theatlantic.com/about/contest/htm)

4. What is the purpose of the text?
- A. To describe a writing contest for students.
  - B. To announce a writing contest for students.
  - C. To amuse the student with writing contest.
  - D. To retell the students about writing contest.
5. The following are required for the works that the participants should prepare, except that they are ....
- A. original.
  - B. easy to read.
  - C. unpublished.
  - D. typewritten.

This table is for question 7 and 8.

Calories per Day

Boys		Girls	
Ages	Calories	Ages	Calories
9-11	2.200	9-11	2.200
12-14	2.650	12-14	2.150
15-17	2.900	15-17	2.150

6. The text is about the number of calories that ....
- A. children need daily based on their ages.
  - B. old people have to consume daily.
  - C. all people must burn in a day.
  - D. the females need in a whole day.

7. How many calories does a thirteen-years-old boy need per day?
- A. 2.156
  - B. 2.650
  - C. 2.200
  - D. 2.900

*This text is for question 10 to 12*

My favorite thing is aquarium. It is a place in which aquatic plants animals, particularly fish, are kept. The term is applied to single tanks for home use in which fish are kept for their decorative effect and interesting habits and to public institutions with tanks for exhibition and scientific study of aquatic life.

I make home aquarium to simulate a natural environment. Aquatic plants supply the oxygen needed by the fish, but often an aerating device is used to furnish additional oxygen.

Goldfish enjoy cool water, but the popular tropical fish must have water at a constant temperature of 22°C (72°F) or more. I must keep the water pure and free of algae for long periods by sufficient aeration and by keeping mollusks in the aquarium. A layer of sand or gravel at the bottom of the tank will hold the roots of such important aquatic plants as tape grass, Vallisneria spiralis, and aid in the removal of debris. My home aquarium ranges in size from small fishbowls holding two or three pets to huge tanks.

8. To give additional oxygen, ... is used in a home aquarium.
- A. a natural environment
  - B. an aerating device
  - C. aquatic plants
  - D. a layer of sand
9. Which is NOT needed to stimulate a natural environment in a home aquarium?
- A. Putting aquatic plants in the aquarium.
  - B. Using a suitable aerating device
  - C. Keeping mollusks in the aquarium
  - D. Removing the debris regularly
10. What is the above passage about?
- A. The writer's home aquarium.
  - B. A natural environment
  - C. Making an aquarium
  - D. Aquatic plants and animals

*This text is for question 11 to 13*

Yesterday night was the night of the fair, the following day was holiday. The children at Tim's school were really excited. They ran down the path out of school as fast as they could. Tim ran all the way home, and changed into his jeans and sneakers. He ate

his dinner quickly, and sat at the window waiting for his dad to come. He couldn't wait for six o'clock when the fair would begin. He has been saving his pocket money for weeks. When Tim his family arrived at the fair, it had just opened. Already there were crowds of people swarming around food stalls, displays and dozens of rides.

"Can I buy some chips and a drink?" asked Tim.

"Okay" said Tim's dad. "But hang on tightly to your waller. There are a lot of people around.

"I'll be fine." said Tim impatiently.

He found a food stall, and ordered his food. When the man brought his chips and drink, without thinking, Tim put his wallet on the counter and picked up his food and drink.

When he glanced back, his wallet had vanished! Tim desperately looked around him, but it was no use. All his pocket money was gone.

11. "When he glanced back, his wallet has vanished!" (last paragraph) The underlined word means ....
- |           |                |
|-----------|----------------|
| A. moved  | C. disappeared |
| B. stolen | D. changed     |
12. The fair started ....
- |                   |                     |
|-------------------|---------------------|
| A. in the morning | C. in the afternoon |
| B. in the evening | D. after school     |
13. The children at Tim's school felt excited because ....
- A. their parents came to visit them
  - B. they would go to the fair
  - C. the following night was a holiday
  - D. they got new jeans and sneakers

*This text is for question 14 to16*

### **Creole Onion Soup**

#### **Ingredients**

75 gr unsalted 6 large onions, peeled and sliced  
salt and pepper  
1 tbsp brown sugar  
600 ml beef stock  
60 gr plain flour  
2 tsp soy sauce  
1 tsp worrester sauce

- 6 slices of French bread
- 6 tbsp grated cheese

### Method

- (1) Melt butter slowly
- (2) Add sliced onion, a pinch of a salt and pepper and the sugar.
- (3) Cook on a slow heat, stirring from time to time, until the unions are browned.
- (4) Add beef stock and bring to the boil
- (5) Sift the flour, stirring hard to avoid lumps
- (6) Add chicken stock
- (7) Simmer for 3-4 hours
- (8) Add sauces
- (9) Top each bowl with bread and cheese and place a very filling soup so you won't want much else to eat. It should be served for 4 to 6 people.

14. How much Worcester sauce do you need to make creole onion soup?
- A. One tsp                                      C. One tbsp  
B. Two tsp                                      D. Six tbsp
15. What should we do prior to adding sliced onion, salt, pepper and sugar?
- A. Cook on a slow heat                      C. Melt butter slowly  
B. Stir from time to time                  D. Wait the onions browned
16. "Simmer for 3-4 hours." What does *simmer* mean?
- A. Boil gently                                      C. Stir carefully  
B. Sift smoothly                                  D. Melt slowly

*This text is for question 17 to 20*

### Jawa Timur Park

For people in East Java, Jatim Park may have been heard many times because it is one of the famous tourist objects in East Java province. Jatim Park offers a recreation pace as well as a study center. Jatim Park is located at Jl. Kartika 2 Barn, East Java. The location is easy to reach because it is only 2.5 kilometers from Batu. This tourist object is about 22 hectares in width.

Visitors can enjoy more than 36 kinds of facilities that will entertain and educate them. After passing the gate, the visitor will find Galvy Nusantara, continue further we will step into Taman Sejarah which display the miniature size of famous landmark in East

Java like Sumberawan Tample, Custom House of Kiai Hasan Besari Ponorogo and Sumerawan Statue.

Another facility that can be enjoyed is Agro Park. This area has an array of rare crops, fruits and animal diorama which consist of unique animals that have been con- served. Jatim Park is suitable for family and school recreation. The recreation area sites offer precious tour as an alternative media of study.

17. What does Jatim Park offer?
- A. A place at Jl. Kertika no 2 East Java
  - B. A place for recreation and a study center
  - C. 22 hectares land used for used for Kiai Hasan’s house
  - D. A sports center for family and students
18. How many facilities can be enjoyed by visitors?
- A. Two
  - B. Twenty two
  - C. Thirty
  - D. Thirty six
19. What is the main idea of the second paragraph?
- A. Gallery Nusantara area located next to the gate.
  - B. East Java’s temple is displayed in minia-ture size.
  - C. There are a lot facilities in Jatim Park.
  - D. The Sumberawan Statue is a tourist object in Jatim Park.
20. “The recreation area sites offer precious tour ... ”(Paragraph 3). The underline word is closest in meaning to ...
- A. Important
  - B. Cheap
  - C. Valuable
  - D. Good

*This text is for question 21 to 23*

My father just purchased a new black car from his three-year saving. He bought it so that my family can travel together easily. Father uses the car to drive my sister and I to school every morning before going to his office. Twice a week, father drives my mother to the traditional market for shopping.

The car has a good design, and it has eight seats; two seats in front, three in the middle, and another three seats at the back row. It has GPS facility that eases the drivers to find out the easiest routes. It is so easy to drive that my mother can drive it by herself if my father is too busy in his office.

21. What does the text tell you about?
- A. The car that the writer got
  - B. The new car of the writer's father
  - C. The good design of the car
  - D. The writer's father and mother
22. What is the second paragraph about?
- A. The way the family drive their car
  - B. What mother does to the car
  - C. The car's appearance and features
  - D. Why the family owns a car
23. "My father just purchased a new black car..." The underlined word can be best replaced by ...
- A. Possessed
  - B. Pursued
  - C. Bought
  - D. Borrowed

*This text is for question 24 to 27*

Dear Alping,

I wanted to write you today to say that I have moved to Malang. My new address is Taman Malang Indah, Blok A 10 No.17 Malang Timur and now I go to SMP Perdana, the best high school in town.

You know that we have shared a lot of ups and downs throughout the past years at school and I am very happy to count you as my friend. I also want to say that I expect to see you quite often in the coming years. I gladly invite you to visit me and my family whenever you have some free time.

I also expect to visit you and your family and I will let you know well in advance so we can plan to get together.

I also wish you a success in your new school, and I hope you keep me up to date on what's happening through email.

Your friend,

*Widadatul Amimiy*

24. The third paragraph of the text tells you about the writer's ....
- A. intention to visit the reader and his relatives.
  - B. family in her new address.
  - C. plan to continue her study.
  - D. ability to make a good plan.



25. The text shows that Alping lives .... now.
- |                             |                    |
|-----------------------------|--------------------|
| A. next to Wirdtutl parents | C. far from Malang |
| B. near Wirdatul's friend   | D. around the city |
26. "We have shared a lot of ups and down throughout the past years ..."  
The phrase "ups and down" in the sentence means the following, EXCEPT....
- A. both good and bad luck  
B. happiness and luck.  
C. great and bad experiences.  
D. easy and difficult time.
27. "... so we can plan to get together." (paragraph 3)  
What does the word "we" in the sentence refer to?
- |                              |                         |
|------------------------------|-------------------------|
| A. Alping and her friends.   | C. Wirdatul's parents.  |
| B. Wirdatul and her parents. | D. Alping and Wirdatul. |

*This text is for question 28 to 29*

**The Only Hotel with Super Extra Comfort**

136 guestrooms including 1 Penthouse (3 bedrooms), 1 Presidential suite (3 bedrooms), 54 Jakarta Suite, 39 Executive and 45 Deluxe Rooms.

Banquet and function facilities are available for multipurpose, meetings, wedding, seminar and conventions for up to 1000 participants.

Recreation facilities wrapped in a unique shape of open air swimming pool, where you can bring your children to play around with a sandy beach atmosphere.

**HOTEL JAYAKARTA BANDUNG**

Jl. Ir H Jaunda (Dago) 381 A, Bandung 40135-Indonesia

Tel (022) 2505888, fax = (022) 2503888, E-mail: jhrbd@indo.net.id

28. Which of the following is FALSE about the hotel?
- A. There are three bedrooms in Pent house.  
B. Its function rooms can accommodate more than one thousand people.  
C. The guest can bring their children on the sandy beach near it.  
D. It provides its guest with an open air swimming pool

29. "Banquet and function facilities are available for multipurpose...."

The underlined word can be best replaced with ...

- A. unexciting
- B. accessible
- C. refundable
- D. avoidable

*This text is for question 30 to 33*

A man and his son were going to the market. While they were walking, a country man passed and said, "You fool, what a don-key for but to ride upon?" So the man put the boy on the donkey. But soon, some passersby said, "See that lazy young steer. He lets his father walk while he rides."

So the man ordered his boy to get off and got on himself, but the passerby "Shame on that lazy old man, he lets his poor son walk, while he rides" The man did not know what to do. Last, he took his boy on the donkey. Then the passerby said "Aren't you ashamed of your- self for overloading the poor donkey?"

The man and the boy got off. They cut down a pole, tied the donkey's feet to it and raised the pole to their shoulders. They arrived to a bridge when the donkey, getting one of its feet loose, kick all out and caused the boy to drop his end of the pole. In the struggle, the donkey fell over the bridge and then it was drowned.

30. Why did the boy get off from the donkey?
- A. The passerby needed him
  - B. His father asked him to do that.
  - C. The donkey was tired carrying him.
  - D. The boy wanted to be with the donkey.
31. What is the main idea of the last paragraph?
- A. The man and his son took a rest near the bridge
  - B. The man and his donkey arrived at the market
  - C. The man's behavior made the donkey alive
  - D. The donkey was carried by its owners
32. What is the moral value of the text?
- A. You should believe in yourself
  - B. You cannot please everyone
  - C. Do what everyone asked you for
  - D. You must be careful when riding a donkey
33. "...tied the donkey's feet to it ..." (last paragraph) The underline word refer to ...
- A. The market
  - B. The pole
  - C. The donkey
  - D. The river

For questions 34 to 37, complete the passage with the words provided.

### TO DIAL CALL FROM OLD TELEPHONE

Lift the handset and listen for the dial tone (34) .... you make a call. When you dial, use either a dial or press-button telephone. (35) .... pause too long between digits. When using a dial make sure that you rotate it firmly round to the stop and let its return by (36) .... When pressing buttons, make sure that each button (37) .... in turn to its full extent. Be careful to press only one button at a time. Press the button at a steady rate.

34. A. After  
B. While  
C. Before  
D. When
35. A. Not  
B. Not to  
C. Don't  
D. Doesn't
36. A. Itself  
B. Herself  
C. Himself  
D. Themselves
37. A. Depress  
B. Depressed  
C. Depressing  
D. To depress
38. Arrange the sentences into meaningful paragraph.

- (1) I went on many rides.
- (2) Recently, I went to Disneyland in LOS Angeles.
- (3) It went very fast and I got a little wet.
- (4) My favorite ride was Splash Mountain.
- (5) I really had a wonderful time there.
- (6) I also enjoyed Tom Sawyer's Island.
- (7) We went there through a hanging bridge and walked through caves.

The correct arrangement is ...

- A. 2-1-3-4-6-5-7  
B. 2-1-5-3-6-4-7  
C. 2-3-1-4-5-6-7  
D. 2-5-1-4-3-6-7
39. Arrange the sentences into meaningful paragraph.
- (1) Why was it named like that?
  - (2) A brontosaurus was as long as four big elephants standing in a line.
  - (3) The man who named it thought that when such a big animal walked, it must have made a noise like thunder.
  - (4) The word brontosaurus means thunder lizard.
- The best arrangement of the sentences above is ....

- A. 4 - 2 - 1 - 3  
B. 3 - 4 - 1 - 2  
C. 2 - 4 - 1 - 3  
D. 1 - 4 - 3 - 2



49. Some nongovernmental organizations ... the implementation of BPJS in front of Presidential Palace for three days.
- A. protest
  - B. protested
  - C. have protested
  - D. have been protesting
50. The police officers always enforce drivers to fasten their seat belts ... ensure their safety.
- A. unless
  - B. because
  - C. in order to
  - D. although